


# IL PERIMETRO

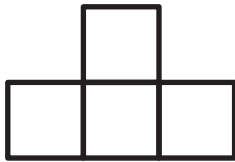
CALCOLA LA MISURA DEL PERIMETRO DI QUESTE FIGURE. TUTTI I QUADRETTI HANNO IL LATO CHE MISURA 1 CM.



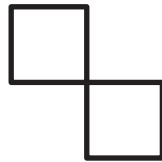
$P = \underline{\hspace{2cm}}$




$P = \underline{\hspace{2cm}}$



$P = \underline{\hspace{2cm}}$



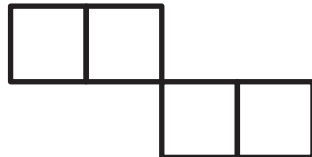
$P = \underline{\hspace{2cm}}$



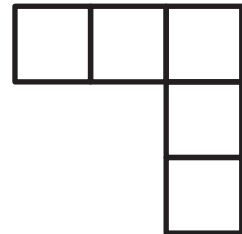
$P = \underline{\hspace{2cm}}$




$P = \underline{\hspace{2cm}}$




$P = \underline{\hspace{2cm}}$




$P = \underline{\hspace{2cm}}$



$P = \underline{\hspace{2cm}}$



$P = \underline{\hspace{2cm}}$



$P = \underline{\hspace{2cm}}$