

IL PERIMETRO

CALCOLA LA MISURA
DEL PERIMETRO DI
QUESTE FIGURE. TUTTI
I QUADRETTI HANNO
IL LATO CHE MISURA 1
CM.



$P = \underline{\hspace{2cm}}$



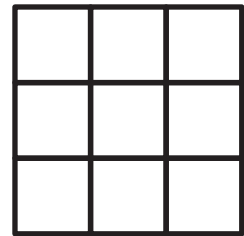
$P = \underline{\hspace{2cm}}$



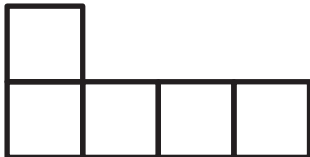
$P = \underline{\hspace{2cm}}$




$P = \underline{\hspace{2cm}}$



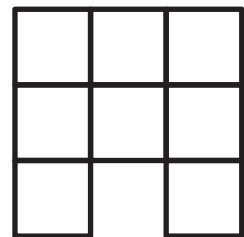
$P = \underline{\hspace{2cm}}$



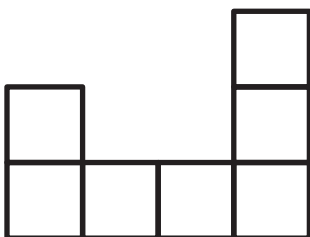
$P = \underline{\hspace{2cm}}$




$P = \underline{\hspace{2cm}}$



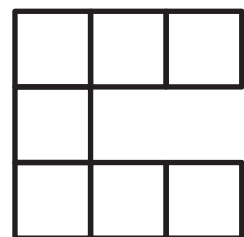
$P = \underline{\hspace{2cm}}$



$P = \underline{\hspace{2cm}}$



$P = \underline{\hspace{2cm}}$



$P = \underline{\hspace{2cm}}$