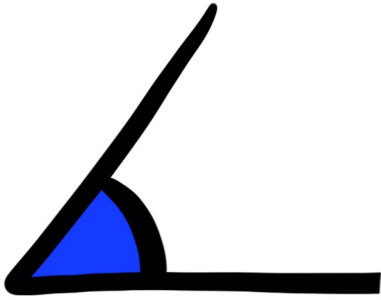
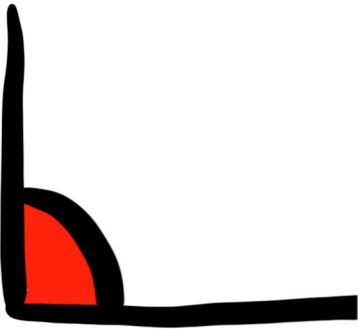


GLI ANGOLI




ANGOLO ACUTO

$$\begin{aligned} &> 0^\circ \\ &< 90^\circ \end{aligned}$$



ANGOLO RETTO
= 90°




ANGOLO OTTUSO

$$\begin{aligned} &> 90^\circ \\ &< 180^\circ \end{aligned}$$



ANGOLO PIATTO
= 180°



ANGOLO GIRO
= 360°

